
 ?
Quanti sono?



1

2

3

4

5


6

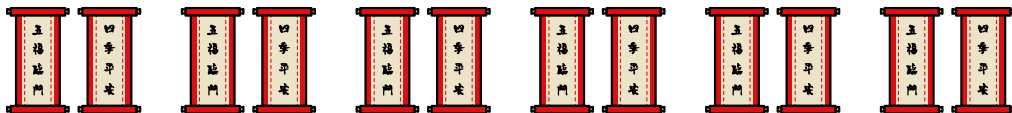

7

8

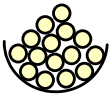
9

10

 ?
Quanti sono?



1	2	3	4	5	6	7	8	9	10
---	---	---	---	---	---	---	---	---	----

 ?
Quanti sono?



1	2	3	4	5	6	7	8	9	10
---	---	---	---	---	---	---	---	---	----